



INDIAN SCHOOL AL WADI AL KABIR
DEPARTMENT OF EVS (2024 – 2025)

RESOURCE PERSON: Mousami Aditya

REVISION WORKSHEET

NAME: _____ **CLASS: I SEC:** _____ **DATE:** _____

I. Fill in the blanks by choosing the correct answer from the bracket.

- a) Big and strong plants are called _____. (herbs / trees)
- b) A _____ lives both on land and in water. (frog / rabbit)
- c) In a traffic signal, the red light says '_____'. (Go / Stop)
- d) The high part of land is called a _____. (snow / hill)
- e) _____ covers most of the Earth. (Water / Grass)
- f) We get wood from the _____. (animals / trees)

II. Match the following with their description.

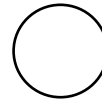
- | | |
|------------|-----------------------------|
| 1. Rose | a. is a wild animal. |
| 2. Octopus | b. are our green friends. |
| 3. Giraffe | c. is a shrub. |
| 4. Globe | d. is a water animal. |
| 5. Plants | e. is a model of our Earth. |

Ans. 1. _____ **2.** _____ **3.** _____ **4.** _____ **5.** _____


III. Read the paragraph carefully and draw a 😊 for the safe habits and draw a ☹️ for the unsafe habits.

Rahul and Ravi go to school by foot. Rahul always walks on the footpath but Ravi walks on the road while walking to the school. Rahul waits for the pedestrian lights to turn green before crossing the road. Ravi climbs on the windows while playing at home. Rahul never plays with sharp objects like knives and scissors. Ravi tries to touch the electric sockets while playing. Rahul always explains to Ravi that it is important to follow the safety rules to be safe.

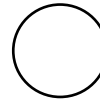
a. Ravi climbs on the windows while playing at home.



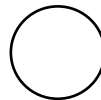
b. Rahul waits for the pedestrian lights to turn green before crossing the road.



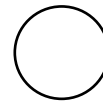
c. Ravi tries to touch the electric sockets while playing.



d. Rahul always walks on the footpath.



e. Rahul never plays with sharp objects like knives and scissors.



IV. Give two examples for each of the following:

a. Trees _____, _____.

b. Land animals _____, _____.

c. Things we get from plants _____, _____.

V. Circle the odd one out.

a) hills plains mountains ocean

b) cat sparrow eagle pigeon

c) wheat mustard mango grass

VI. Read the following statements carefully. Write 'True' for the correct statements and 'False' for the incorrect statements.

- a) The Earth has two parts – land and water. _____
- b) Plants give us tea and coffee. _____
- c) Pet animals live in forest. _____
- d) We must play with matchsticks and fire. _____
- e) A valley is a low land between two hills and mountains. _____

VII. Label the different parts of a plant and colour it.

